

# Compare number sentences



1 Mo has 4 blue sweets and 3 pink sweets.



Rosie has 4 blue sweets and 5 pink sweets.





Who has more sweets? \_\_\_\_\_

Explain how you know.



2 Colour the bar models to show that  
 $3 + 6 = 8 + 1$




Write one more calculation that gives the same answer.

\_\_\_\_\_

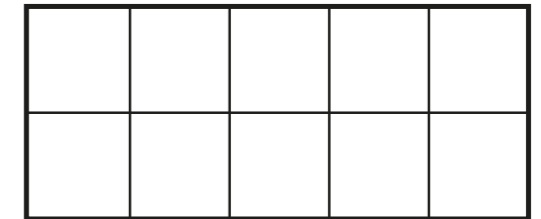

Compare answers with a partner.



3 Draw counters to show  $9 + 3$



Draw counters to show  $9 + 4$



Write  $<$ ,  $>$  or  $=$  to make the statement correct.

$9 + 3$  ○  $9 + 4$


4 Write  $<$ ,  $>$  or  $=$  to make the statements correct.

a)  $3 + 5$  ○  $3 + 9$


b)  $7 + 2$  ○  $4 + 2$

c)  $10 + 5$  ○  $9 + 6$

5 Cross out counters to show  $9 - 3$



Cross out counters to show  $9 - 4$



Write  $<$ ,  $>$  or  $=$  to make the statement correct.

$$9 - 3 \bigcirc 9 - 4$$

6 Write  $<$ ,  $>$  or  $=$  to make the statements correct.

a)  $20 - 5 \bigcirc 20 - 6$

b)  $17 - 4 \bigcirc 13 - 4$

c)  $11 - 3 \bigcirc 12 - 4$

7 Complete the additions.

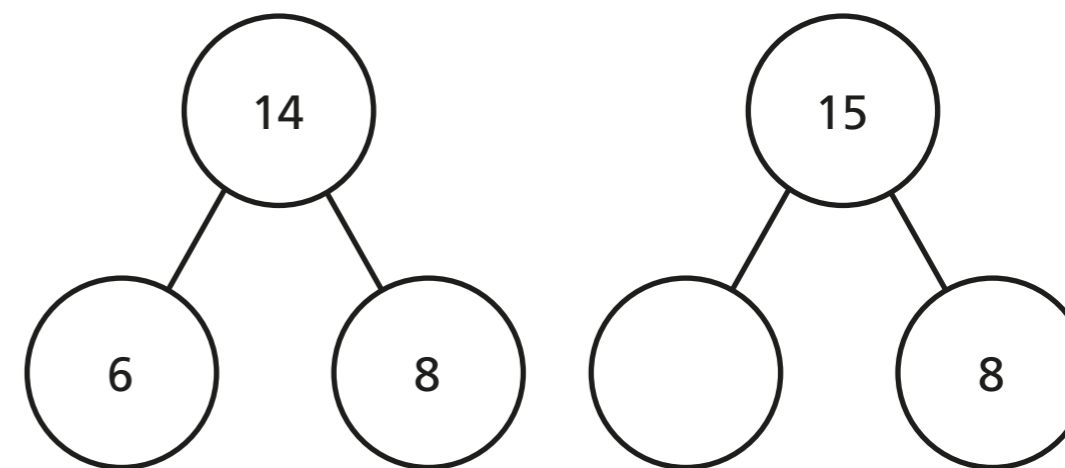
a)  $4 + 1 = 3 + \square$

b)  $14 + 1 = 13 + \square$

c)  $9 + 11 = \square + 10$

d)  $10 + 9 = \square + 8 = 12 + \square$

8



Teddy knows what the missing number is without calculating.

Explain how Teddy knows this.

What is the missing number?

